


Plant Growth Experiment: Nutrients


Group Names: _____

Question: How do different amounts of nutrients change the way a plant grows?


Hypothesis: How do you think plants will grow with different amounts of nutrients? Draw a plant and show what you think will happen if plants receive no nutrients, some (6 pellets) nutrients or a lot of nutrients (12 pellets).



0 PELLETS



6 PELLETS



12 PELLETS

Describe your drawings in the space below.

Plant Growth Experiment

Group Data Collection Sheet:

Name: _____

Date: _____

Treatment: How many fertilizer pellets did you use:

	Number Seeds Germinated	Plant Height (cm)	Number of Leaves	Number of Flowers	Number of Seeds
Days					
1					
2					
3					
4					
5					
6					
7					
8					
9					
10					
11					
12					
13					
14					
15					
16					
17					
18					
19					
20					
21					
22					
23					
24					
25					
26					
27					
28					

